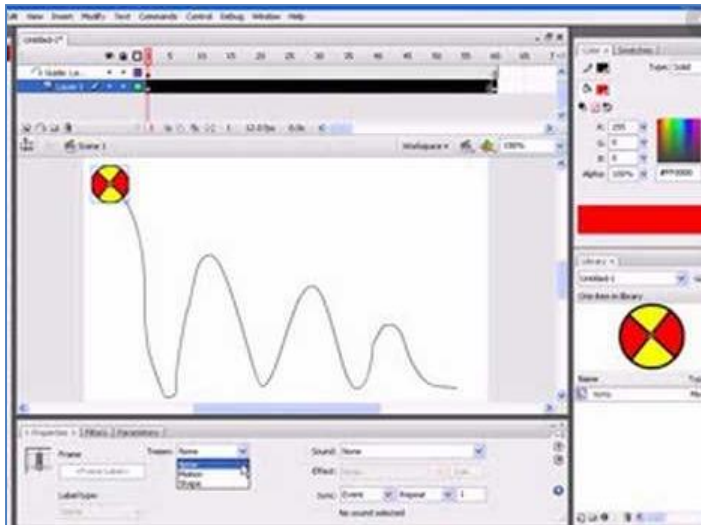


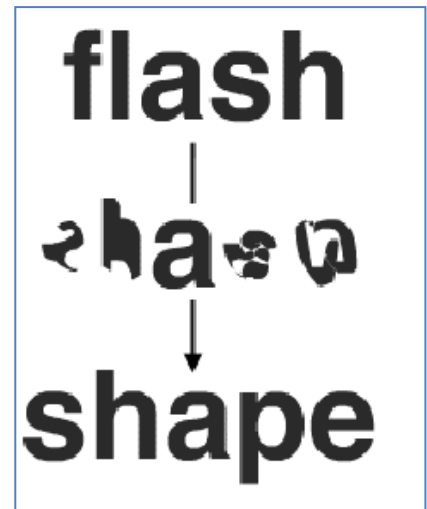
Computer Revision 2 Lesson-10

Q.1. Which of the following is motion tweening along the path?

Ans. A



A

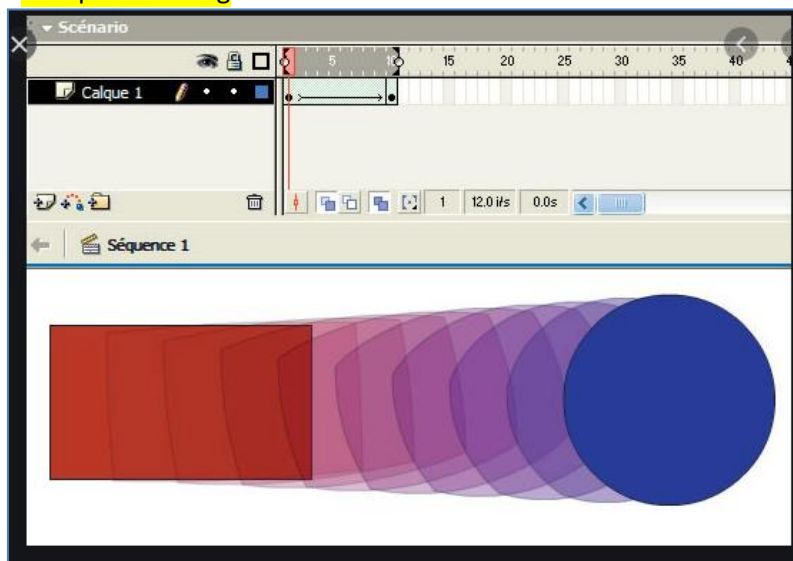


B

Q.2. Which process is going on in the image given below?

A. Motion Tweening

B. Shape Tweening



Q.3. A black circle (●) in Adobe Flash represents _____
Object

Keyframe

Q.4. F5 is the shortcut key to insert a frame.

True

False

Q.5. There are 3 types of Symbols.

So, the symbol which adds interactivity to the movie and responds to the mouse click are known as _____ symbols.

Graphics Symbol

Button Symbol

Movie Clip Symbols